

YEAR 2 PROCEDURAL TEST A

NAME:

Score: / 28

1.



How many houses are there?

(1)

2. Count on in **tens**

10 → **20** → **30** → → →

(1)

3. Write in order

46 23 58 37

Smallest

Largest

(1)

4.



How many sweets are there?

(1)

5.

$80 + 3 =$

(1)

$20 + 20 =$

(1)

$20 + 50 =$

(1)

6.




What fraction of the diagram is shaded?

(1)

7. Join each clock to the correct time



Half past 2



Quarter past 2



2 o'clock



Quarter to 2

(1)

8. $16 + 5 =$ (1)

$25 - 7 =$ (1)

9. **Our favourite sport**

	Girls	Boys
Football	3	5
Tennis	2	1
Swimming	5	4
Rugby	2	6
Dodgeball	6	4

How many **girls** said **swimming**? (1)

How many **children** said **tennis**? (1)

10.



Cake
65p

If I have **40p** how much more do I need to buy the cake?

p (1)

11.



This bookcase is **one metre** high. How many **centimetres** is that?

centimetres

(1)

12.



10 felts in each pack

How many felts in **4** packs?

(1)

Nat buys **60** felts. How many Packs does he buy?

(1)

13.



<p>Pens</p> <p>40p each</p>



Amy buys two pens and pays with a **£1 coin**.

How much change does she get?

(2)

14. $38 + 63 = 63 +$

(1)

15.



6 for 60p

How much do **12** lollies cost?

(2)

16.



How much money?

 p

(1)

17. Draw an **8cm** line with your ruler.

(1)


18.



Tick the triangle.

(1)

19. What is the name of this shape?



(1)

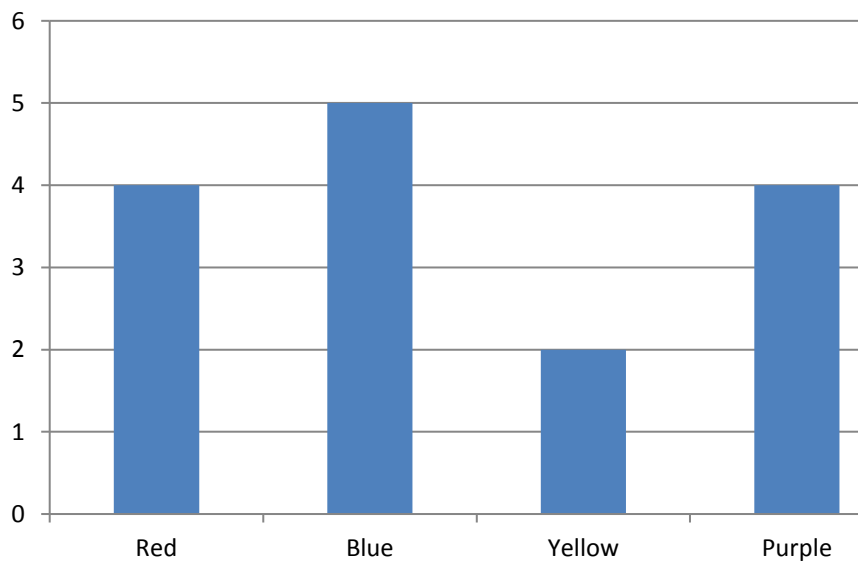
20. Ada weighs some potatoes. Circle a possible weight.



2 litres 2 metres 2 kilograms 2 kilometres (1)

21.

Favourite Colour



How many said **yellow**?

(1)

END OF TEST.