

YEAR 2 PROCEDURAL TEST A

SOLUTIONS

NAME:

Score: / 28

1.

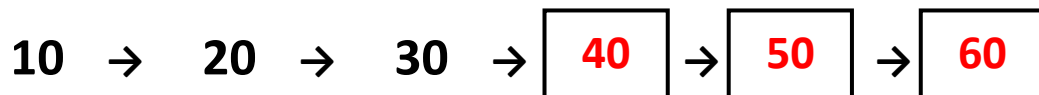


How many houses are there?

15

(1)

2. Count on in **tens**



(1)

3. Write in order **46 23 58 37**

23

37

46

58

(1)

Smallest

Largest

4.



How many sweets are there?

30

(1)

5.

$80 + 3 =$

83

(1)

$20 + 20 =$

40

(1)

$20 + 50 =$

70

(1)

6.



What fraction of the diagram is shaded?


$\frac{1}{3}$

(1)

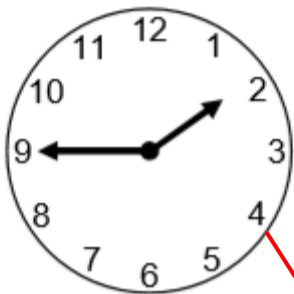
7. Join each clock to the correct time



Half past 2



Quarter past 2



2 o'clock



Quarter to 2

(1)

8. $16 + 5 =$ 21 (1)

$25 - 7 =$ 18 (1)

9. **Our favourite sport**

	Girls	Boys
Football	3	5
Tennis	2	1
Swimming	5	4
Rugby	2	6
Dodgeball	6	4

How many **girls** said **swimming**? 5 (1)

How many **children** said **tennis**? 3 (1)

10.



Cake

65p

If I have **40p** how much more do I need to buy the cake?

25 p (1)

11.



This bookcase is **one metre** high. How many **centimetres** is that?

100 centimetres

(1)

12.



10 felts in each pack

How many felts in **4** packs?

40

(1)

Nat buys **60** felts. How many Packs does he buy?

6

(1)

13.



<p>Pens</p> <p>40p each</p>



Amy buys two pens and pays with a **£1 coin**.

How much change does she get?

<p>40p + 40p = 80p</p> <p>£1 = 100p</p> <p>100p - 80p = 20p</p>	(2)
--	-----

14. $38 + 63 = 63 +$

38

 (1)

15.



6 for 60p

How much do **12** lollies cost?

Double the lollies so double the price.
120p or £1.20

(2)

16.



How much money?

14 p

(1)

17. Draw an **8cm** line with your ruler.

Any correct 8cm line

(1)

18.



Tick the triangle.

(1)

19. What is the name of this shape?



(1)

20. Ada weighs some potatoes. Circle a possible weight.



2 litres

2 metres

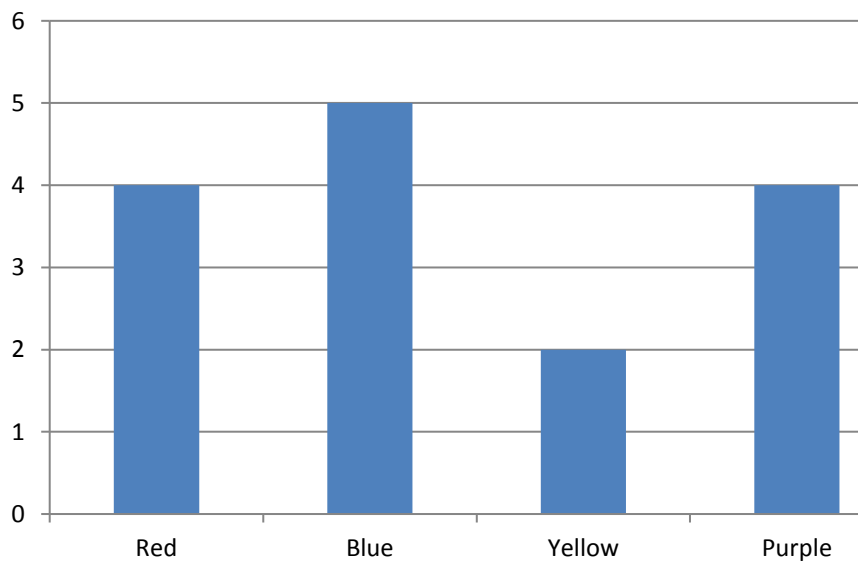
2 kilograms

2 kilometres

(1)

21.

Favourite Colour



How many said **yellow**?

2

(1)

END OF TEST.